



THIRD SPACE
LEARNING

Mathematics

Paper 3

(Calculator)

Higher Tier

AQA GCSE

SET 5

Mathematics Paper 3 (Calculator) Foundation Tier AQA

GCSE SET 5

Name

Total marks

Paper length: 1hr 30mins



Instructions

- Use black ink or ball-point pen.
- Fill in the boxes at the top of this page with your name, centre number and candidate number.
- Answer all questions.
- Answer the questions in the spaces provided – there may be more space than you need.
- You must show all your working.
- Diagrams are NOT accurately drawn, unless otherwise indicated.
- Calculators may be used.

Information

- The total mark for this paper is 80
- The marks for each question are shown in brackets – use this as a guide as to how much time to spend on each question.

Question	Mark
1	
2	
3	
4	
5	
6	
7	
8	
9	
10	
11	
12	
13	
14	
15	
16	
17	
18	
19	
20	
21	
22	
23	

Advice

- Read each question carefully before you start to answer it.
- Keep an eye on the time.
- Try to answer every question.
- Check your answers if you have time at the end.

You must have: Ruler graduated in centimetres and millimetres, protractor, pair of compasses, pen, HB pencil, eraser. Tracing paper may be used.

This practice paper is based on the topics from the **advanced information for the November 2026 exam series**.

Please note, this practice paper is an example to help revision, these topics can be tested in other ways and other topics may be included in the actual papers

1 (a) Simplify $q^7 \times q^5$

[1 mark]

Answer _____

(b) Simplify $\frac{8p^9}{4p^2}$

[2 marks]

Answer _____

(c) Write down the value of a and b if $(2m^a)^3 = bm^{12}$

[2 marks]

Answer $a =$ _____ $b =$ _____

2 Bobby has £350000. He wants to purchase a house.

When Bobby purchases a house, he will need to pay legal fees of £2000 as well as stamp duty tax at the following rates:

The first £120000 of the property price	No stamp duty
The second £125000 (£125000 – £250000)	2%
Anything above £250000	5%

Bobby decides he wants to buy a house for £330000.

Can Bobby afford to buy the house and pay the fees and stamp duty?

Show how you decide.

[4 marks]

Answer _____

- 3 (a) Ben is a hockey goalkeeper.

The probability that Ben saves a goal is 0.7.

What is the probability that Ben does not save a goal?

[1 mark]

Answer _____

- (b) In one hockey season, there are 200 shots at the goal.

Work out an estimate for the number of goals Ben will save.

[1 mark]

Answer _____

- 4 (a) Write 0.000034 in standard form.

[1 mark]

Answer _____

- (b) Write 2.71×10^4 as an ordinary number.

[1 mark]

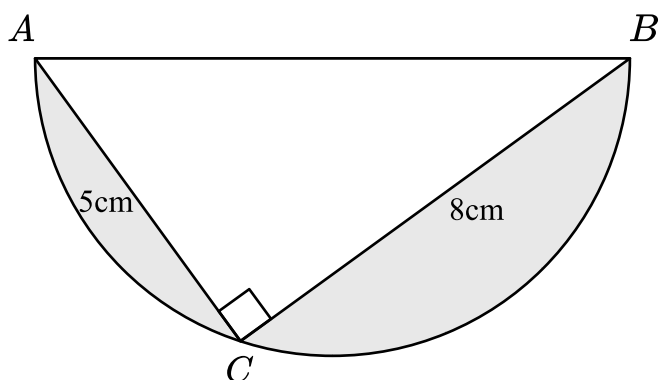
Answer _____

- (c) Write the fraction $\frac{3 \times 10^8}{4.5 \times 10^9}$ in its simplest form.

[1 mark]

Answer _____

5 Here is a right angled triangle inside a semi-circle.



(a) Work out the length AB .

Give your answer to 2 decimal places.

[2 marks]

Answer _____ cm

(b) Work out the shaded area.

Give your answer to 2 decimal places.

[4 marks]

Answer _____ cm^2

- 6 The mean of three numbers is 120
The three numbers are $3a$, $5a + 2$ and $2a + 8$
Work out the value of the smallest number.

[4 marks]

Answer _____

- 7 Here are five numbers.

$$47^{11} \qquad 47^{34} \qquad 47^{55} \qquad 47^{60} \qquad 47^{93}$$

Find the lowest common multiple of the numbers.

[4 marks]

Answer _____

- 8 It takes 3 builders 8 hours to build a 20 metre wall.
How long would it take 4 builders to build a 40m wall?

[3 marks]

Answer _____

- 9 a and b are integers such that

$$2 \leq a < 8$$

$$5 < b \leq 10$$

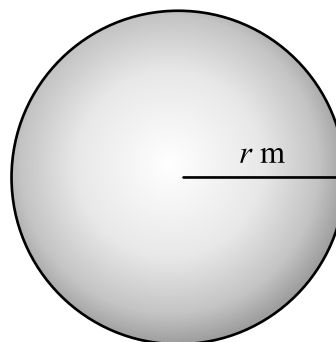
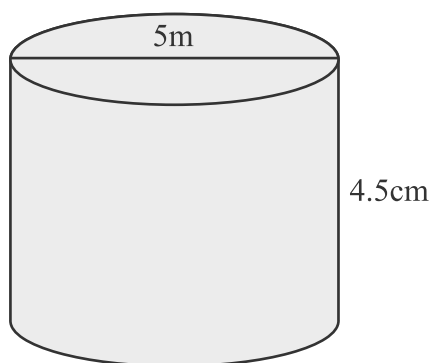
$$a + b = 11$$

Write down all the possible values of b .

[2 marks]

Answer _____

10 Here is a cylinder and a sphere.



The sphere has radius r metres.

Dante wants to paint both the cylinder and the sphere.

Dante has enough paint to cover 250m^2 .

Find the maximum value of r to ensure that Dante has enough paint to cover both objects.

Give your answer to 3 significant figures.

[4 marks]

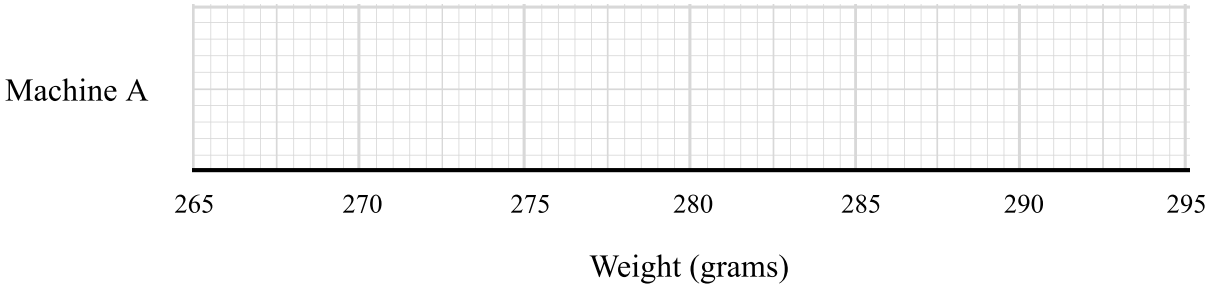
Answer _____

11 Jessie records the weights of the cakes produced by Machine A in a factory.

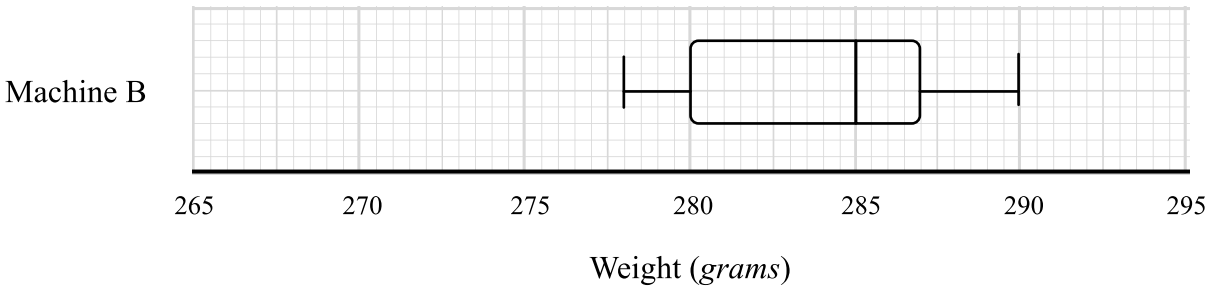
	Weight (grams)
Lowest value	270g
Lower quartile	275g
Median	281g
Interquartile range	10g
Highest value	290g

(a) Draw a box plot to show this information.

[3 marks]



The results of the weights of the cakes produced by machine B in the same factory are shown in the following box plot.



(b) Compare the distribution of the weights of the cakes produced by Machine A and Machine B.

[2 marks]

- 12** A restaurant has 5 starters, 8 main courses and 4 desserts.

Tristan is going to choose either:

- A starter and a main course OR
- A main course and a dessert OR
- A starter, a main course and a dessert

Show that there are 232 different options that Tristan could select.

[2 marks]

- 13** Here are the first five terms of a quadratic sequence

7 11 17 25 35

Find an expression in terms of n , for the n th term of the sequence.

[3 marks]

Answer _____

14 Alison rolls 2 dice and adds the values

Find the probability that the sum of the two values is greater than 7

[3 marks]

Answer _____

15 (a) Factorise $p^2 - q^2$

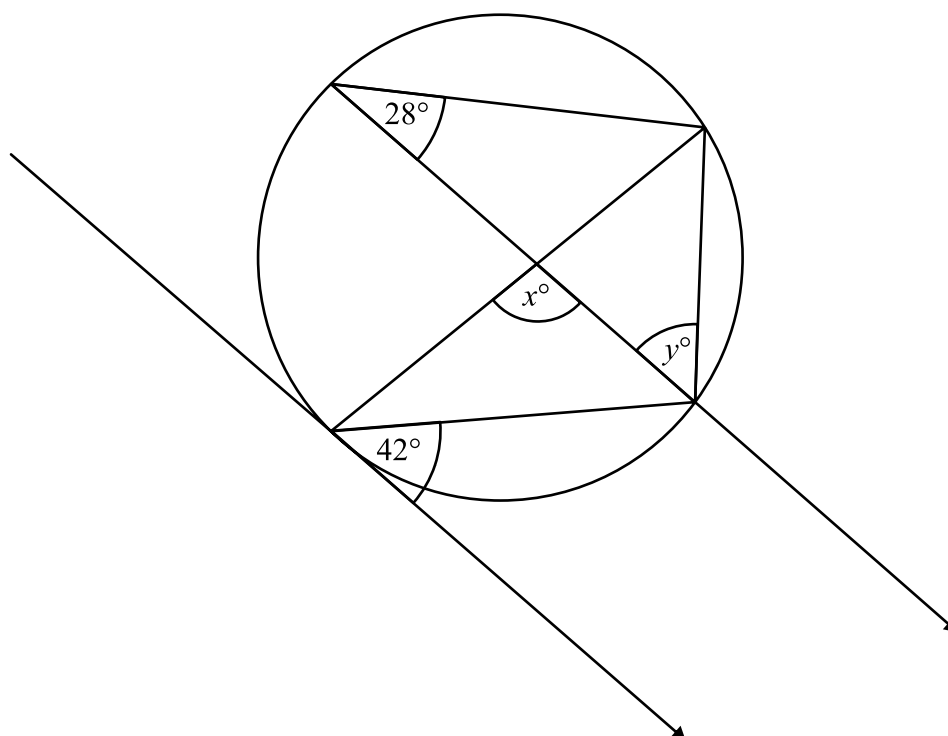
[1 mark]

Answer _____

(b) Show how you could use your answer to part a to calculate $51^2 - 49^2$

[2 marks]

16



(a) Work out the size of angle x .

[2 marks]

Answer _____°

(b) Work out the size of angle y .

[2 marks]

Answer _____°

- 17 At the end of 2024 there were 4200 fish in a lake.
By the end of 2025, the number of fish remaining was 4032

It is assumed that the number of fish in the lake is given by

$$F = ar^n$$

where F is the number of fish in the lake and n is the number of years after the end of 2024.

- (a) Describe the correlation shown in the graph.

[1 mark]

Answer $a =$ _____

- (b) Show that $r = 0.96$

[2 marks]

- (c) Show that by the end of 2034, the number of fish in the lake is expected to have decreased by over 30%.

[3 marks]

18 M and N are two geometrically similar solids

The surface area of shape N is 448cm^2

The surface area of shape M is 1008cm^2

The volume of shape M is 1134cm^3

Work out the volume of shape N.

[3 marks]

Answer _____

- 19 Express $\frac{x}{x+3} + \frac{2x}{3x-1} - 5$ as a single fraction in its simplest form.

[3 marks]

Answer _____

20 $W = \frac{u - v}{t}$

$u = 14.1$ to 3 significant figures.

$v = 2.35$ to 2 decimal places.

$t = 0.47$ to 2 decimal places.

Work out the lower bound for W .

Give your answer to 2 decimal places.

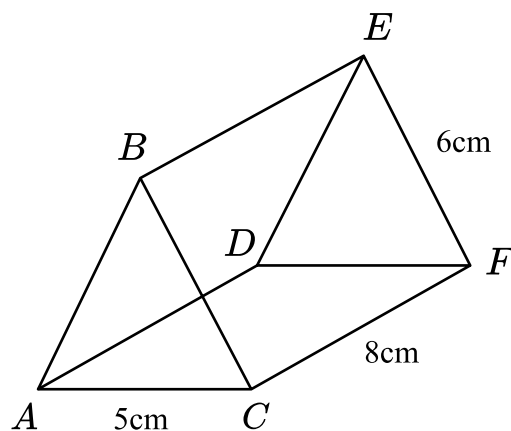
[3 marks]

Answer _____

21 $ABCDEF$ is an isosceles triangular prism.

$$AB = BC$$

$$AC = 5\text{cm}, CF = 8\text{cm and } EF = 6\text{cm}$$



Calculate the size of the angle between the line AE and the plane $ACFD$.

Give your answer to 1 decimal place.

[4 marks]

Answer _____ °

22 Here is a quadratic equation.

$$ax^2 + 6x + c = 0$$

The solutions to this equation are given by $x = \frac{-6 \pm 2\sqrt{42}}{6}$

Find the value of a and the value of c .

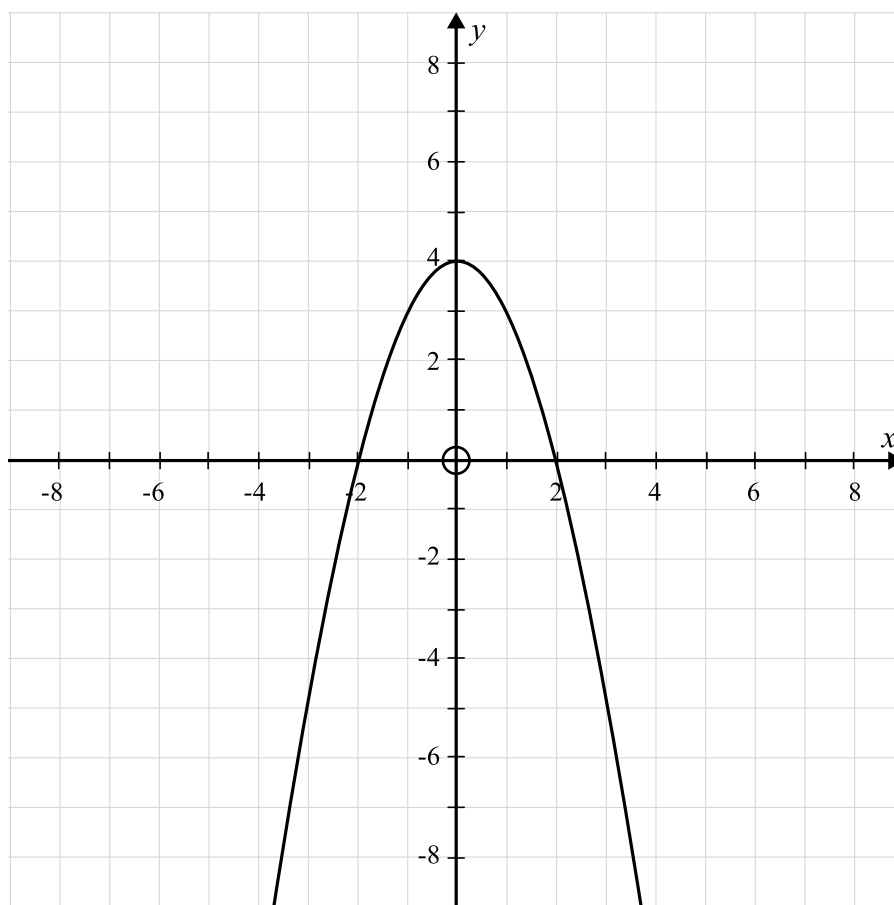
Show your working clearly.

[3 marks]

Answer $a =$ _____

Answer $c =$ _____

23 This is the graph of $y = f(x)$.



(a) On the grid above, draw the graph of $y = f(x - 2)$

[2 marks]

(b) A translation of $\begin{pmatrix} -3 \\ 1 \end{pmatrix}$ is applied to $y = f(x)$.

Write down the equation of the new graph.

[2 marks]


Answer _____

Looking to improve your school's maths results without stretching your budget?

Tutoring from our spoken AI maths tutor Skye gives schools an even more affordable option for every pupil.

- ✓ 90% cheaper than other tutoring providers
- ✓ Curriculum-aligned lessons designed by qualified teachers
- ✓ Discounts available for long-term bookings and MATs

 thirdspacelearning.com

 0203 771 0095

 hello@thirdspacelearning.com

Where to go next?

For more GCSE maths revision resources and worksheets, visit the Third Space Learning [GCSE maths revision](#) pages. Or scan the QR code to discover our library of FREE GCSE maths revision resources:

